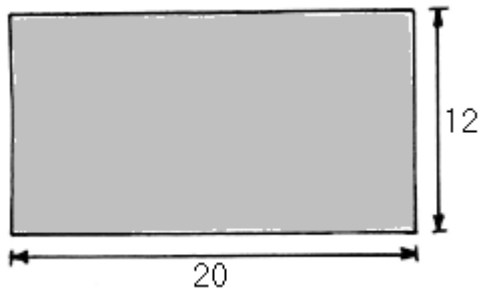


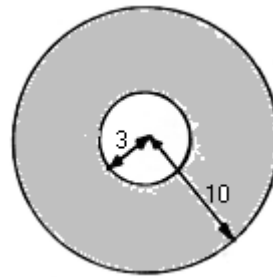
Repàs d'àrees i perímetres de figures.

Calcula l'àrea i el perímetre de les següents figures:

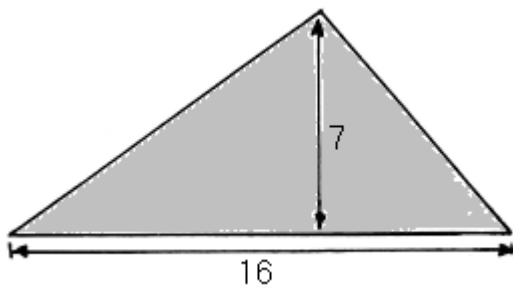
1.



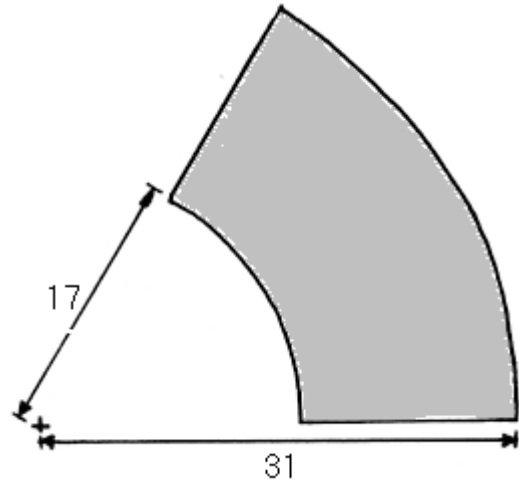
6.



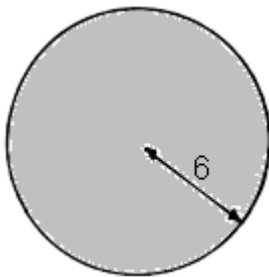
2. (només l'àrea)



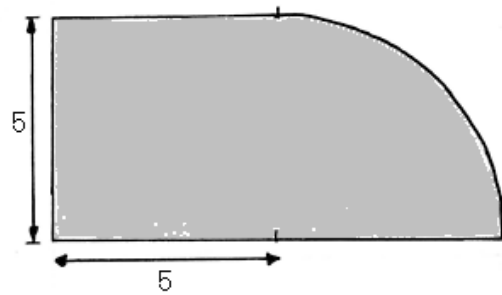
7. (aquesta figura té un angle de 60°)



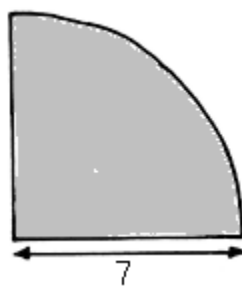
3.



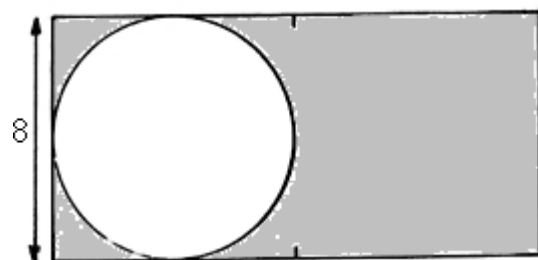
8.



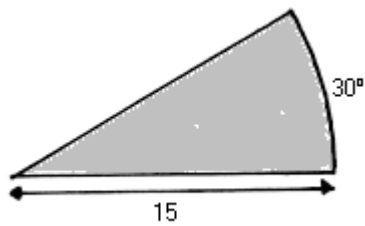
4.



9.



5.



Solucions:

1. A= 240 P= 64 2. A=56 3. A=113,04 P=37,68 4., A=38,46 P=24,99 5.A=58,875 P=37,85
6.A=285,74 P=81,64 7. A=351,67 P=78,23 8.A=44,63 P=27,85 9.A=77,76 P=73,12